

# CAREERS360



## NBSE HSLC Mathematics

Question Paper 2022

**2022**  
**MATHEMATICS**

Total marks : 80

Time : 3 hours

**General Instructions:**

- i) Approximately 15 minutes is allotted to read the question paper and revise the answers.
- ii) The question paper consists of 18 questions.
- iii) All questions are compulsory.
- iv) Internal & general choice have been provided in some questions.
- v) Marks allocated to every question are indicated against it.

**N.B:** Check to ensure that all pages of the question paper is complete as indicated on the top left side.

**Section – A**

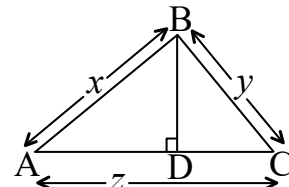
**1. Choose the correct answer from the given alternatives.**

- (a) If  $\alpha$  and  $\beta$  are the zeroes of the polynomial  $f(x) = px^2 - 2x + 3p$  and  $\alpha + \beta = \alpha\beta$  then the value of  $p$  is **1**  
(i)  $-\frac{2}{3}$  (ii)  $\frac{2}{3}$  (iii)  $\frac{1}{3}$  (iv)  $-\frac{1}{3}$
- (b) The pair of equations  $x + y - 40 = 0$  and  $x - 2y + 14 = 0$  have **1**  
(i) a unique solution. (ii) exactly two solutions.  
(iii) infinitely many solutions. (iv) no solution.
- (c) If  $x = 1$  is a common root of  $ax^2 + ax + 2 = 0$  and  $x^2 + x + b = 0$ , then  $ab =$  **1**  
(i) 1 (ii) 2 (iii) 3 (iv) 4
- (d) If sum of the first five terms of an AP is 30 and the 5<sup>th</sup> term is 10, then the sum of the first four terms of the AP is **1**  
(i) 5 (ii) 10 (iii) 20 (iv) 30
- (e) If  $\tan 2\theta = \cot(\theta + 15^\circ)$ , where  $2\theta$  and  $(\theta + 15^\circ)$  are acute, the value of  $\theta$  is **1**  
(i)  $22^\circ$  (ii)  $25^\circ$  (iii)  $30^\circ$  (iv)  $35^\circ$
- (f)  $y$ -axis divides the join of  $P(-4, 2)$  and  $Q(8, 3)$  in the ratio **1**  
(i) 3 : 1 (ii) 1 : 3 (iii) 2 : 1 (iv) 1 : 2
- (g) If tangents PA and PB from a point P to a circle with centre O are inclined to each other at angle of  $80^\circ$ , then  $\angle POA$  is equal to **1**  
(i)  $50^\circ$  (ii)  $60^\circ$  (iii)  $70^\circ$  (iv)  $80^\circ$

- (h) An arc of a circle is of length  $5\pi$  cm and the sector it bounds has an area of  $20\pi$  cm<sup>2</sup>. The radius of the circle is 1  
 (i) 16 cm (ii) 12 cm (iii) 8 cm (iv) 4 cm
- (i) The ratio of the total surface area to the lateral surface area of a cylinder with base radius 80 cm and height 20 cm is 1  
 (i) 2 : 1 (ii) 3 : 1 (iii) 4 : 1 (iv) 5 : 1
- (j) Two dice are rolled once. The probability of getting such numbers on two dice, whose product is a perfect square, is 1  
 (i) 8 (ii)  $\frac{1}{8}$  (iii)  $\frac{9}{2}$  (iv)  $\frac{2}{9}$

### Section – B

2. An army contingent of 616 members is to march behind an army band of 32 members in a parade. The two groups are to march in the same number of columns. What is the maximum number of columns in which they can march? 2
3. Find the value of  $k$  for the quadratic equation  $kx(x-2)+6=0$  has equal roots. 2
4. Find the values of  $y$  for which the distance between the points  $P(2, -3)$  and  $Q(10, y)$  is 10 units. 2
5. In the adjoining figure,  $\triangle ABC$  is a right triangle in which  $\angle B = 90^\circ$  and  $BD \perp AC$ . If  $AB = x$  units,  $BC = y$  units and  $AC = z$  units, then find  $BD$ . 2



6. The length of the minute hand of a clock is 14 cm. Find the area swept by the minute hand in 5 minutes. 2

### Section – C

7. Answer any three from the following questions (a) to (c).  $3 \times 3 = 9$
- (a) On dividing  $x^3 - 3x^2 + x + 2$  by a polynomial  $g(x)$ , the quotient and remainder were  $(x - 2)$  and  $(-2x + 4)$  respectively. Find  $g(x)$ .
- (b) Meena went to a bank to withdraw ₹2000. She asked the cashier to give her ₹50 and ₹100 notes only. Meena got 25 notes in all. Find how many notes of ₹50 and ₹100 she received.
- (c) Solve the following pair of linear equations by cross-multiplication method:

$$x - 3y - 7 = 0$$

$$3x - 3y - 15 = 0$$

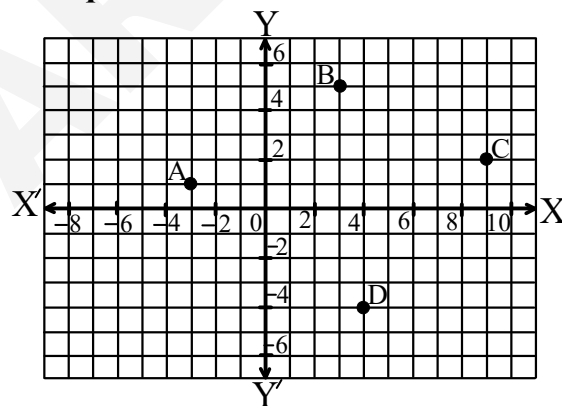
- (d) A train travels 360 km at a uniform speed. If the speed had been 5 km/h more, it would have taken 1 hour less for the same journey. Find the speed of the train.
- (e) A sum of ₹700 is to be used to give seven cash prizes to students of a school for their overall academic performance. If each prize is ₹20 less than its preceding prize, find the value of each of the prizes.

8. Answer any two from the following questions (a) to (d).  $2 \times 3 = 6$

- (a) In triangle ABC, right angled at B, if  $\tan A = \frac{1}{\sqrt{3}}$ , find the value of  $\cos A \cos C - \sin A \sin C$ , with the help of a right triangle.
- (b) If  $\sin(A - B) = \frac{1}{2}$ ,  $\cos(A + B) = \frac{1}{2}$ ,  $0^\circ < A + B \leq 90^\circ$ ,  $A > B$ , find A and B.
- (c) Prove that:  $\frac{1 + \sec A}{\sec A} = \frac{\sin^2 A}{1 - \cos A}$ , where angle A is an acute angle.
- (d) A tree breaks due to storm and the broken part bends so that the top of the tree touches the ground making an angle  $30^\circ$  with it. The distance between the foot of the tree to the point where the top touches the ground is 8 m. Find the height of the tree.

9. Case Study based question:

3



Four friends are seated at the points A, B, C and D on a lawn keeping social distancing, as shown in the figure above. One more friend wants to join them and sit exactly at the middle position E on a straight line between A and C. Based on the above information, answer the following questions (i) to (iii).

- (i) The distance between A and D is  
 (a)  $\sqrt{72}$  units (b)  $\sqrt{73}$  units (c)  $\sqrt{74}$  units (d)  $\sqrt{75}$  units
- (ii) The coordinates of the position of E are  
 (a)  $\left(\frac{3}{2}, 3\right)$  (b)  $\left(3, \frac{3}{2}\right)$  (c) (6, 3) (d) (3, 6)
- (iii) x-axis divides the distance/length between B and D in the ratio  
 (a) 3 : 4 (b) 4 : 3 (c) 5 : 4 (d) 4 : 5
10. a. Construct an isosceles triangle whose base is 8 cm and altitude 4 cm and then another triangle whose sides are  $1\frac{1}{2}$  times the corresponding sides of the isosceles triangle. (Traces of construction only is required.)  
**Or** **3**  
 b. Draw a line segment AB of length 8 cm. Taking A as centre, draw a circle of radius 4 cm and taking B as centre, draw another circle of radius 3 cm. Construct tangents to each circle from the centre of the other circle. (Traces of construction only is required.)
11. a. A chord of a circle of radius 15 cm subtends an angle of  $60^\circ$  at the centre. Find the areas of the corresponding minor and major segments of the circle. [Use  $\pi = 3.14$  and  $\sqrt{3} = 1.73$ ]  
**Or** **3**  
 b. How many silver coins, 1.75 cm in diameter and of thickness 2 mm, must be melted to form a cuboid of dimensions 5.5 cm  $\times$  10 cm  $\times$  3.5 cm?
12. Answer any two from the following questions (a) to (c). **2  $\times$  3 = 6**
- (a) A student noted the number of cars passing through a spot on a road for 100 periods each of 3 minutes and summarised it in the table given below. Find the mode of the data:
- | Number of cars | 0-10 | 10-20 | 20-30 | 30-40 | 40-50 | 50-60 | 60-70 | 70-80 |
|----------------|------|-------|-------|-------|-------|-------|-------|-------|
| Frequency      | 7    | 14    | 13    | 12    | 20    | 11    | 15    | 8     |
- (b) The lengths of 40 leaves of a plant are measured correct to the nearest millimeter, and the data obtained is represented in the following table:
- | Length (in mm)   | 118-126 | 127-135 | 136-144 | 145-153 | 154-162 | 163-171 | 172-180 |
|------------------|---------|---------|---------|---------|---------|---------|---------|
| Number of leaves | 3       | 5       | 9       | 12      | 5       | 4       | 2       |
- Find the median length of the leaves.

- (c) A box contains 90 discs which are numbered from 1 to 90. If one disc is drawn at random from the box, find the probability that it bears: (i) a two-digit number, (ii) a perfect square number, (iii) a number divisible by 5.

**Section – D**

13. a. Draw the graphs of the equations  $x - y + 1 = 0$  and  $3x + 2y - 12 = 0$ . Determine the coordinates of the vertices of the triangle formed by these lines and the  $x$ -axis and shade the triangular region.

**Or**

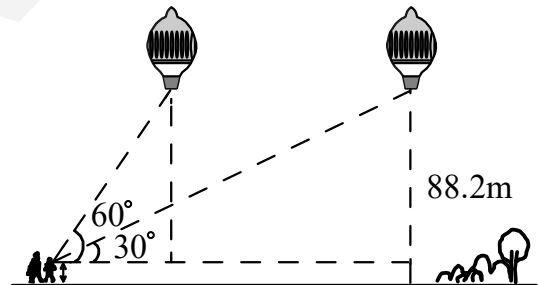
**5**

- b. Places A and B are 100 km apart on a highway. One car starts from A and another from B at the same time. If the cars travel in the same direction at different speeds, they meet in 5 hours. If they travel towards each other, they meet in 1 hour. What are the speeds of the two cars?
14. a. A statue, 1.6 m tall, stands on the top of a pedestal. From a point on the ground, the angle of elevation of the top of the statue is  $60^\circ$  and from the same point the angle of elevation of the top of the pedestal is  $45^\circ$ . Find the height of the pedestal.

**Or**

**5**

- b. A 1.2 m tall girl spots a balloon moving with the wind in a horizontal line at a height of 88.2 m from the ground. The angle of elevation of the balloon from the eyes of the girl at any instant is  $60^\circ$ . After sometime, the angle of elevation reduces to  $30^\circ$ . Find the distance travelled by the balloon during the interval.

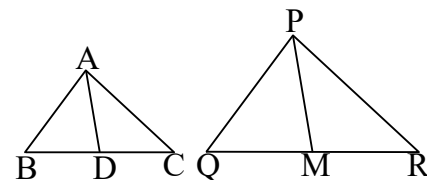


15. a. State and Prove Pythagoras Theorem.

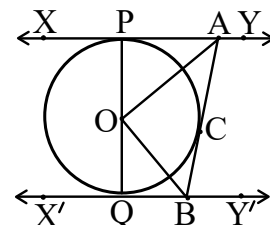
**Or**

**5**

- b. Sides AB and BC and median AD of a triangle ABC are respectively proportional to sides PQ and QR and median PM of  $\triangle PQR$ . Show that  $\triangle ABC \sim \triangle PQR$ .



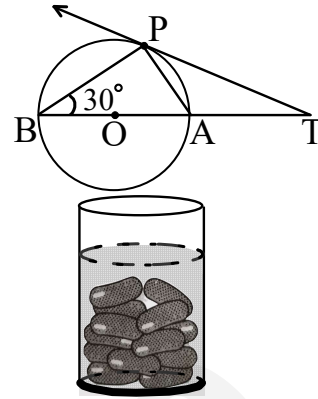
16. a. In the adjoining figure, XY and X'Y' are two parallel tangents to a circle with centre O and another tangent AB with point of contact C intersecting XY at A and X'Y' at B. Prove that  $\angle AOB = 90^\circ$



**Or**

**5**

- b. In the adjoining figure, O is the centre of the circle and TP is the tangent to the circle from an external point T. If  $\angle PBT = 30^\circ$ , prove that  $BA : AT = 2 : 1$



17. a. A *gulab jamun*, contains sugar syrup up to about 30% of its volume. Find approximately how much syrup would be found in 45 *gulab jamuns*, each shaped like a cylinder with two hemispherical ends with length 5 cm and diameter 2.8 cm.

Or

5

- b. A container, opened from the top and made up of a metal sheet, is in the form of a frustrum of a cone of height 16 cm with radii of its lower and upper ends as 8 cm and 20 cm, respectively. Find the cost of the milk which can completely fill the container @ of ₹20 per litre. Also find the cost of metal sheet used to make the container, if it costs ₹8 per 100 cm<sup>2</sup>. [Take  $\pi = 3.14$ ]

18. a. The following distribution shows the daily pocket allowance of children of a locality. Find the mean pocket allowance by step-deviation method.

Daily pocket allowance (in ₹)	More than 11	More than 13	More than 15	More than 17	More than 19	More than 21	More than 23
Number of children	64	57	51	42	29	9	4

Or

5

- b. The distribution of heights (in cm) of 96 children is given below:

Height (in cm)	Number of children
124-128	5
128-132	8
132-136	17
136-140	24
140-144	16
144-148	12
148-152	6
152-156	4
156-160	3
160-164	1

Draw a less than type cumulative frequency curve for this data and use it to compute median height of the children.

\*\*\*\*\*