

AP SSC **SOCIAL**

Model Question Paper
2024 (English medium)

This Model Question Paper contains 8 pages.

21E & 22E

SOCIAL STUDIES, Paper-I & II
(English Version)

Time : 3 Hours, 15 Minutes

Maximum Marks : 100

Instructions :

1. In the duration of 3 hours, 15 minutes, 15 minutes of time is allotted to read the question paper.
2. All answers shall be written in the answer booklet only.
3. Question paper consists of 4 Sections and 33 Questions.
4. Internal choice is available in Section IV only.
5. Answers shall be written neatly and legibly.

SECTION I

12 × 1 = 12

Notes : 1. Answer all the questions.

2. Each question carries 1 mark.

1. What are called 'Duns'?
2. Call Center Employee : Service Sector : : Fisherman :?.....
3. Expand A.G.W.
4. What is meant by Sex Ratio?

21E & 22E

5. Mention the most common reasons for males and females to migrate.
6. "We will drown, but we will not move!" Who wrote these words and to whom?
7. What is the name of the last Tsar of Russia ?
8. Match the 'Agent Orange' with one of the following :
 - a) Plant Killer
 - b) Silent Spring
 - c) Chipko Movement
9. Who succeeded Jawaharlal Nehru as Prime Minister?
10. Which International Organization is connected with the given logo?



21E & 22E

11. Plot the below information on a bar graph :

Seat share in 1952 Elections

Indian National Congress	364
People's Democratic Front	38

12. Arrange the following from the West to the East :

Austria, Japan, India, China

SECTION II

8 × 2 = 16

Notes : 1. Answer all the questions.

2. Each question carries 2 marks.

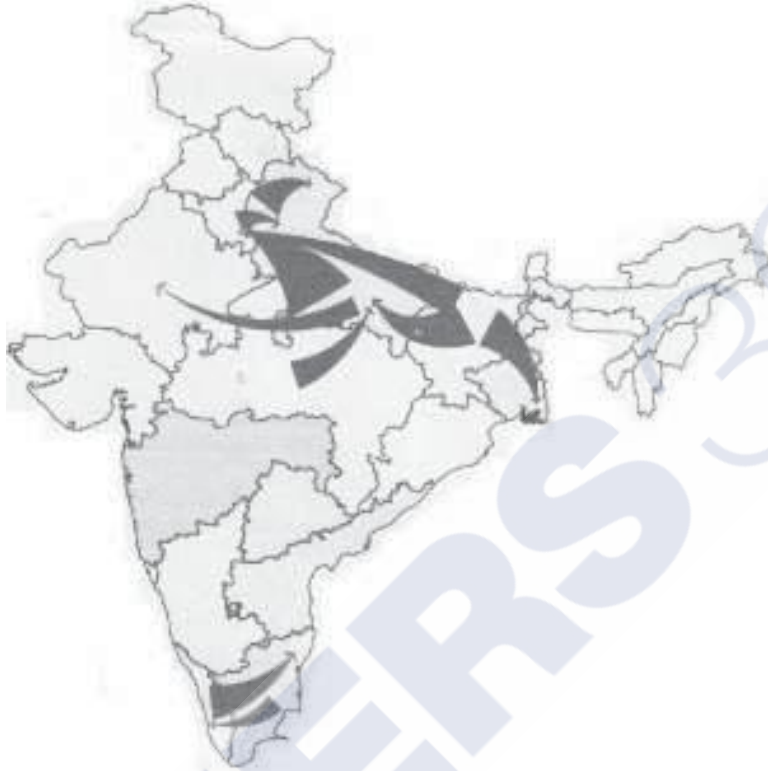
13. What is 'Site' in view of Settlements?
14. Comment on the conditions of small farmers in India.
15. Based on the information given below, write your observations.

Employment in Various Sectors

Year	Agriculture	Industry	Services
1972-73	74%	11%	15%
2009-10	53%	22%	25%

21E & 22E

16. Observe the given map :



Que.: Name any four states in which migration takes place.

17. Write any two benefits of Lok Adalat.
18. What is meant by Coalition Government?
19. How many States and Union Territories are there in India today?
20. Appreciate the 'Meira Paibi Movement'.

21E & 22E

SECTION III

$8 \times 4 = 32$

Notes : 1. Answer all the questions.

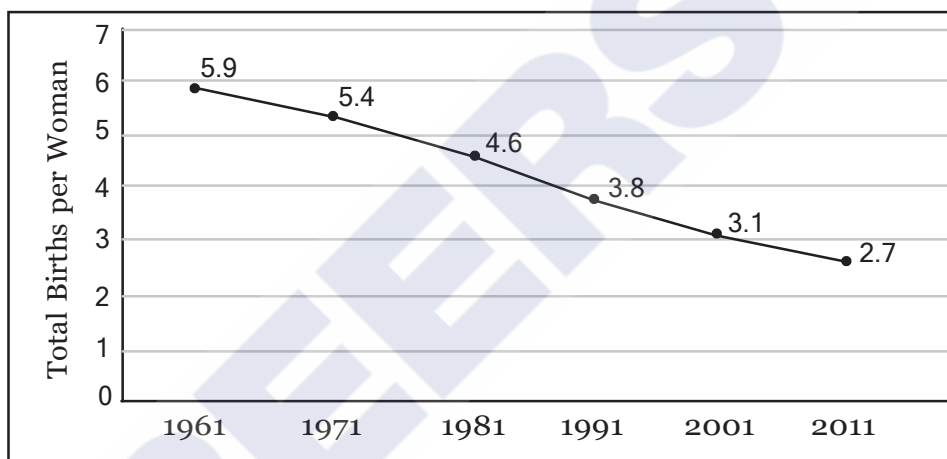
2. Each question carries 4 marks.

21. Explain Environment's Source Function and Sink Function.

22. Why are the people migrating from rural areas to urban areas?

23. Write your observations from the given graph.

Fertility Rate in India 1961 – 2011



24. Explain the uses of Public Distribution System.

25. What are the immediate causes of the First and Second World Wars?

26. What were the difficulties faced in the conduct of First General Elections in India?

21E & 22E

27. Observe the given map and answer the following questions.



- i) Who occupied more region?
- ii) Name the river in the map.

28. The Twentieth Century is called 'The Age of Extremes'. Why?

SECTION IV

$5 \times 8 = 40$

Notes : 1. Answer all the questions.

2. Each question carries 8 marks.

3. Each question has internal choice.

29. a) What are the differences between Eastern Coastal Plain and Western Coastal Plain?

OR

b) In What ways was the emergency period a set back to Indian democracy.

30. a) Explain about the impact of Globalization on India.

OR

b) Explain about the relations between India and China.

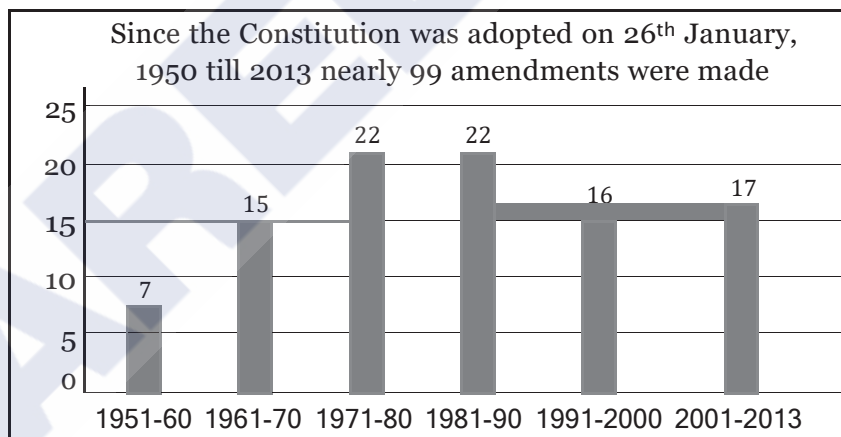
21E & 22E

31. a) Plot the information given in the following pie graphs in a table and write your observation.



OR

- b) Observe the graph and answer the following questions :



- i) How many amendments were made till 2013?
- ii) In which decades, more amendments were made?
- iii) In which year did the Constitution come into force?
- iv) Show the particulars given in the graph in tabular form.

21E & 22E

32. a) Increasing urbanization is not just about greater opportunities for people and economy. It also results in many problems - Comment.

OR

- b) "War is always destructive". Comment.

33. A) Locate the following in the given outline map of India

- a) i) Vindhya Ranges
- ii) Krishna River
- iii) Sikkim
- iv) Thar Desert

OR

- b) i) Aravalis
- ii) Godavari River
- iii) Andaman & Nicobar Islands
- iv) Tropic of Cancer

- B) Locate the following in the given outline map of World.

- a) i) Bay of Bengal
- ii) Turkey
- iii) Australia
- iv) Germany

OR

- b) i) Indian Ocean
- ii) Nigeria
- iii) Vietnam
- iv) France

SSC PUBLIC EXAMINATIONS
SOCIAL STUDIES - MARKS DIVISION
(PAPER I & II)

Time: 3.15 min

Max Marks: 100

SECTION I (OBJECTIVE QUESTIONS):

NO OF QUESTIONS (1-12)	SYLLABUS	MARKS
6	Paper I (Lessons 1 -12)	6 X 1 = 6Marks
6	Paper II (Lessons 13 -22)	6 X 1 = 6Marks
		TOTAL: 12 x 1 = 12M

SECTION II (VERY SHORT ANSWER QUESTIONS):

NO OF QUESTIONS (13-20)	SYLLABUS	MARKS
4	Paper I (Lessons 1 -12)	4 X 2 = 8 Marks
4	Paper II (Lessons 13 -22)	4 X 2 = 8 Marks
		TOTAL: 8 x 2 = 16 M

SECTION III (SHORT ANSWER QUESTIONS)

NO OF QUESTIONS(21-28)	SYLLABUS	MARKS
4	Paper I (Lessons 1 -12)	4 X 4 = 16Marks
4	Paper II (Lessons 13 -22)	4 X 4 = 16Marks
		TOTAL: 8 x 4 = 32M

SECTION IV (ESSAY TYPE QUESTIONS)

NO OF QUESTIONS(29-33)	SYLLABUS	MARKS
2	Paper I (Lessons 1 -12)	2 X 8 = 16Marks
2	Paper II (Lessons 13 -22)	2 X 8 = 16Marks
1 (MAP POINTING) (Q 33A & 33 B)	Paper I & Paper II (LESSONS 1 – 12 & 13 - 22)	4 + 4 = 8 Marks
		TOATAL: 5 X 8 = 40 M

SECTION WISE QUESTIONS & MARKS:

SECTION	QUESTION NO	MARKS
I	1 - 12	12 X 1 = 12 M
II	13 - 20	8 X 2 = 16 M
III	21 - 28	8 X 4 = 32 M
IV	29 - 33	5 X 8 = 40 M
	TOTAL: 33 QUESTIONS	100 MARKS

WEIGHTAGE FOR ACADEMIC STANDARDS:

ACADEMIC STANDARD	WEIGHTAGE	MARKS
I (CONCEPTUAL UNDERSTANDING)	40%	40
II (INTERPRETATION)	10%	10
III (INFORMATION SKILLS)	15%	15
IV (CURRENT ISSUES)	10%	10
V(MAPPING SKILLS)	15%	15
VI (APPRECIATION & SENSITIVITY)	10%	10
	TOTAL: 100%	100 MARKS